
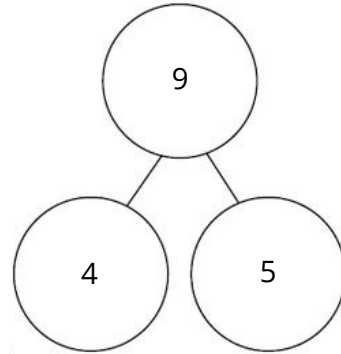


Possible Solutions


- a) There are 4 ducks swimming in a small pond. 5 more ducks waddle over and join them in the pond to swim. How many ducks are swimming in the pond? Draw a picture, a number bond, and a number sentence to represent this problem.



$$4 + 5 = 9$$



- b) There are 6 puppies playing in the yard. While playing, two puppies went inside to drink some water. How many puppies are left in the yard? Draw a picture, a number bond, and a number sentence to represent this problem.



$$6 - 2 = 4$$

